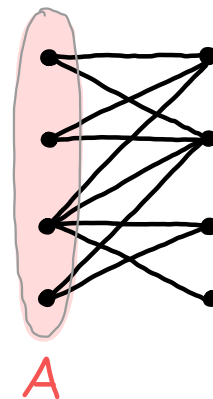
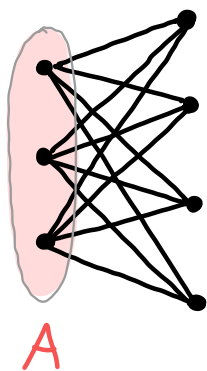
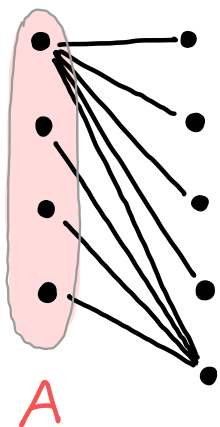


In each of these graphs, can you find a matching that covers every vertex of A?



If not, why not? If so, what was your strategy/algorithm?